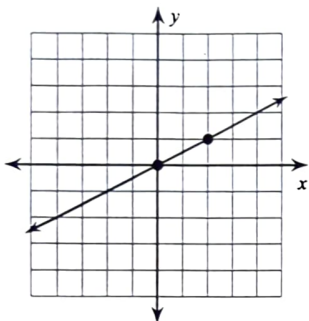


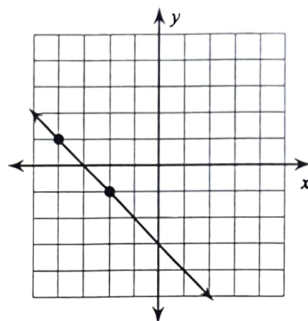
Finding Slope From a Graph

Find the slope of each line.

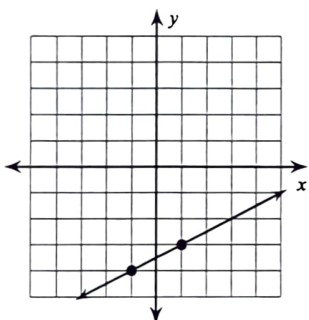
1)



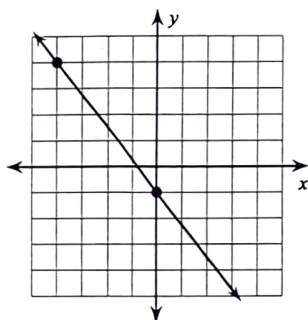
2)



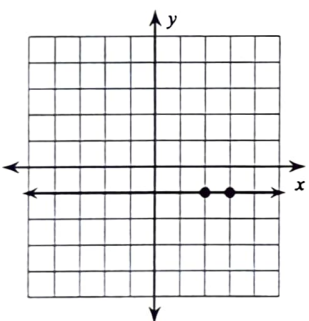
3)



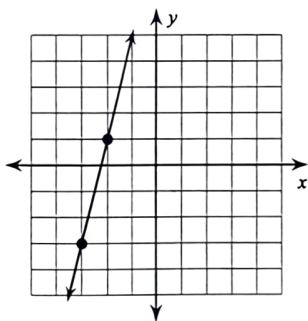
4)



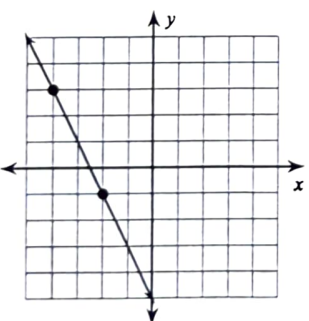
5)



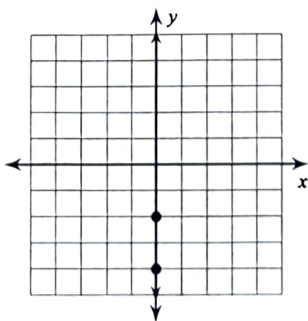
6)



7)



8)



Finding Slope From Two Points

Find the slope of the line through each pair of points.

1) $(19, -16), (-7, -15)$

2) $(1, -19), (-2, -7)$

3) $(-4, 7), (-6, -4)$

4) $(20, 8), (9, 16)$

5) $(17, -13), (17, 8)$

6) $(19, 3), (20, 3)$

7) $(3, 0), (-11, -15)$

8) $(19, -2), (-11, 10)$